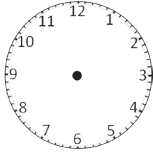




2019 SUMMER REVIEW

2ND GRADE • PART 2

<p style="text-align: center;">ADD</p> $\begin{array}{r} 41 \\ + 8 \\ \hline \end{array}$ $\begin{array}{r} 67 \\ + 13 \\ \hline \end{array}$ $\begin{array}{r} 604 \\ + 33 \\ \hline \end{array}$	<p style="text-align: center;">SUBTRACT</p> $\begin{array}{r} 16 \\ - 9 \\ \hline \end{array}$ $\begin{array}{r} 65 \\ - 13 \\ \hline \end{array}$ $\begin{array}{r} 478 \\ - 33 \\ \hline \end{array}$ $\begin{array}{r} 772 \\ - 42 \\ \hline \end{array}$	<p style="text-align: center;">TELLING TIME</p>  <p>Draw hands on the clock to read 6:30</p>
<p style="text-align: center;">EVEN OR ODD</p> <p>76 _____</p> <p>114 _____</p> <p>605 _____</p> <p>220 _____</p>	<p style="text-align: center;">COMPLETE THE SEQUENCE</p> <p>• 6, 8, 10, _____, _____, _____</p> <p>• 200, 300, 400, _____, _____, _____</p> <p>• 12, 15, 18, _____, _____, _____</p>	<p style="text-align: center;">INEQUALITIES</p> <p><, > or =</p> <p>98 _____ 92</p> <p>337 _____ 373</p> <p>356 _____ 351</p>
<p style="text-align: center;">ALPHABETIZE</p> <ul style="list-style-type: none"> • friend • • grocery • • game • • noisy • • Friday • 	<p style="text-align: center;">SOLVE THE PROBLEM</p> <p>Sarah collects baseball trading cards. Her grandfather helped start her collection. In the beginning, she had 25 cards. She bought 8 more at the grocery store. At the Greenville Drive stadium, she gave away 5 to her best friend.</p> <p>How many cards does she have in all? _____</p>	
<p style="text-align: center;">COMPLETE THE PATTERN</p> <p>✂ ⇨ ✂ ⇨ _____, _____, _____, _____</p> <p>❄ ⇨ ⇨ _____, _____, _____, _____</p>	<p style="text-align: center;">GEOGRAPHY</p> <p>Put the following in order of smallest to largest.</p> <p>Mountain, mound, hill, rise _____</p> <p>Creek, River, Stream _____</p> <p>City, town, metropolis _____</p>	
<p style="text-align: center;">EDITING</p> <p>Put the correct punctuation at the end of the following sentences.</p> <p>Catch the ball _____</p> <p>Franklin, can you come to my party _____</p> <p>Sarah swam in the pond _____</p>	<p style="text-align: center;">EDITING</p> <p>Add an apostrophe to show ownership.</p> <ol style="list-style-type: none"> The ball was placed in Sams backpack. My uncles collection of marbles is in the cupboard. Noah built the ark according to Gods plan. 	




















2019 SUMMER REVIEW CONTINUED

MAP SYMBOLS

What of these symbols would be used to for Eastside Presbyterian Church? _____

LEGEND

	Marsh		Main road		Camp site		Church with Tower
	Coniferous Forest		Railway Line		Caravan site		Church with Spire
	Aquaduct		Footpath		Viewpoint		
	Bridge		Golf		Carpark		
	Quarry		Post Office		Lighthouse in Use		

